

FACULTY OF HEALTH SCIENCES

DEPARTMENT OF PHARMACY

COURSE: PHA 2403 – GENERAL PHARMACOLOGY I

SUPPLEMENTARY EXAMINATION

AUGUST 2023

MARKS: 100

TIME: 3 HOURS

INSTRUCTIONS:

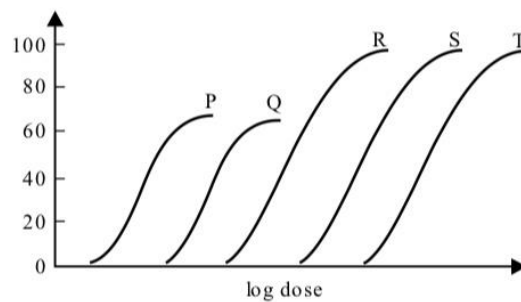
- **ANSWER ALL QUESTIONS**

SECTION A – MULTIPLE CHOICE QUESTIONS (MCQs)**[10 MARKS]**

Choose one best answer for each question.

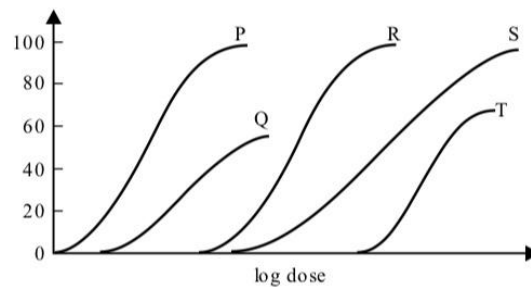
1. Which of the following parameters is used to indicate the ability of a drug to produce the desired therapeutic effect relative to a toxic effect?
 - A. Potency
 - B. Therapeutic index
 - C. Efficacy
 - D. Bioavailability
2. Sodium bicarbonate is usually given as an antidote for patients who have ingested large amounts of aspirin to increase its elimination. Which of the following best explains the mechanism of this increased elimination?
 - A. Increased glomerular filtration of aspirin
 - B. Urinary ion trapping of aspirin
 - C. Decreased renal biotransformation of aspirin
 - D. Decreased bioavailability of aspirin
3. In one study, Aspirin also known as Acetylsalicylic acid, was given to patient at an oral dose of 200 mg. Aspirin was found to follow first-order, one-compartment model kinetics and had a volume of distribution of 100 L. After the oral administration of the drug, the theoretical plasma concentration at time 0 turned out to be 1 mg/L. which of the following was most likely the oral bioavailability of aspirin in this study?
 - A. 0.1
 - B. 0.5
 - C. 1.0
 - D. 2.3
4. Paracetamol is a drug indicated for pyrexia or mild to moderate pain. Given that the half-life ($t_{1/2}$) of paracetamol is 4 hours, calculate the elimination rate constant (k). NB: *Paracetamol elimination follows first order kinetics*. Show your calculations.
 - A. $k = 0.173$
 - B. $k = 2.772$
 - C. $k = 0.693$
 - D. $k = 5.772$
5. In one clinical study, paracetamol was given at intravenous dose of 2 mg. In this study it followed a first-order, one-compartment model kinetics and had a volume of distribution of 10 L. after 6 hours paracetamol plasma concentration was 50 $\mu\text{g/L}$. Which of the following was most likely the half-life of paracetamol in this study (in hours)?
 - A. 1
 - B. 2
 - C. 3
 - D. 4

6. The figure below depicts the in vitro log dose-response curves of different drugs acting on the same receptors.



Which of the drugs has the highest affinity for the receptor?

- A. Drug P
 - B. Drug R
 - C. Drug S
 - D. Drug T
7. The figure below depicts the in vitro log dose-response curves of five different



drugs (P,Q,R,S and T).

Which of the following pairs of drugs can fully activate the same receptors?

- A. Drugs P and Q
 - B. Drugs P and R
 - C. Drugs P and S
 - D. Drugs Q and T
8. A 64-year-old man with terminal cancer had been suffering from continuous pain and started treatment with morphine. After a few days of treatment, the initial dose was no longer effective, and the physician gradually increased the dose knowing that pharmacodynamic tolerance most likely had occurred. Which of the following best explains the mechanism of tolerance in this patient?
- A. Accelerated morphine metabolism
 - B. Increased affinity of receptors to morphine
 - C. Decreased morphine receptor density
 - D. Decreased binding of morphine to plasma proteins

9. Two new drugs were tested in laboratory animals. Which of the following drug parameters was most likely recorded to estimate the relative potency of both drugs?
- A. The therapeutic index of both drugs
 - B. The maximal responses produced by each drug
 - C. The graded log dose-response curve of both drugs
 - D. The volume of distribution of both drugs
10. A 65-year-old woman suffering from atrial fibrillation had been taking a drug to treat this condition for 6 months. The drug had no intrinsic activity and bound reversibly to β_1 receptors. Which of the following terms best defines this drug?
- A. Partial agonist
 - B. Non-competitive antagonist
 - C. Competitive antagonist
 - D. Functional antagonist

SECTION B – TRUE OR FALSE**[20 MARKS]**

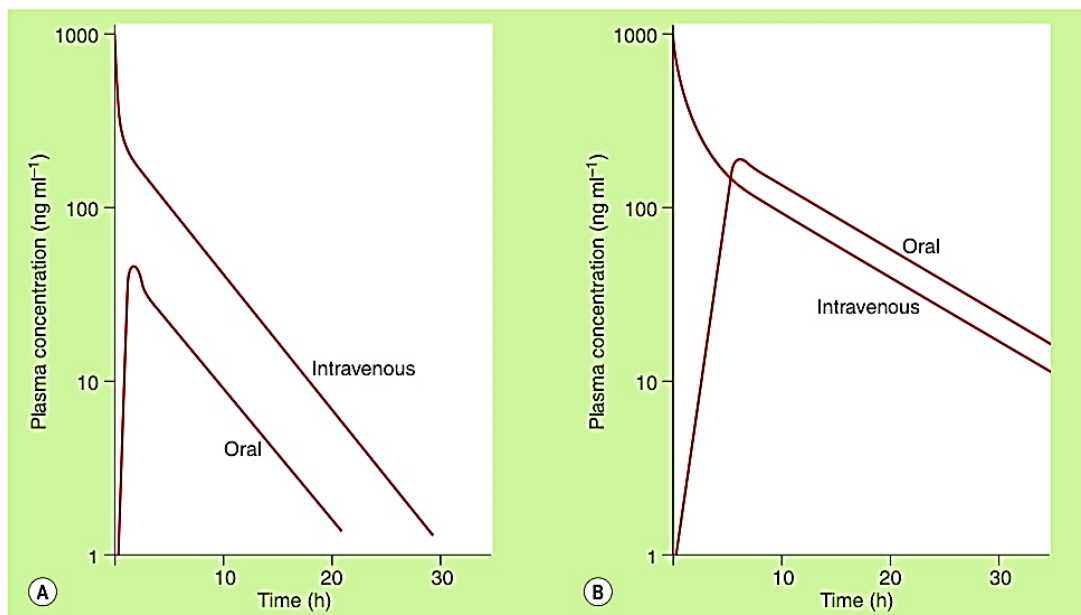
State whether the following statements are TRUE or FALSE

1. The liver, kidney and brain are among the human organs known to be well-perfused organs.
2. The muscle, skin and fat are among the tissues known to be well-perfused and receive the drug at the initial phase of distribution.
3. Binding to albumin of acidic drugs is usually reversible.
4. Cancer may lead to increased levels of α_1 -acid glycoprotein (a protein in plasma that binds basic drugs) and this may lead to increased distribution of such basic drugs.
5. Intrinsic activity refers to the fact that the number of receptors can vary with time.
6. Affinity refers to the maximal effect that can be produced by a drug.
7. Potency refers to the dose of a drug required to produce a given effect.
8. Efficacy refers to the effect that can be produced by a drug.
9. The bioavailability is by definition equal to 1 for drugs given by intravascular (IV) route.
10. The bioavailability of drugs given by subcutaneous (SC) or intramuscular (IM) route is relatively better than that given by the oral route.
11. Drugs given by sublingual route bypass the first pass effect.
12. Approximately 50% of the drug that is absorbed from the rectum will bypass the liver, thereby reducing hepatic first-pass metabolism.
13. Phase I reactions are those in which enzymes catalyze the conjugation of the substrate with a second molecule.
14. Phase II reactions are those that include oxidation, reduction or hydrolytic reactions.
15. The phase I enzymes lead to the introduction of functional groups such as -OH, -COOH.
16. Phase II enzymes produce a metabolite with improved water solubility.
17. If the drug is extensively bio-transformed by the liver before it gets into the systemic circulation, oral bioavailability will be increased.
18. If the drug is extensively bio-transformed by the liver before it gets into the systemic circulation, oral bioavailability will be reduced.
19. Sublingual and intramuscular administrations avoid first-pass effect.
20. Bioavailability of the drug is independent of first-pass effect.

SECTION C – SHORT/LONG ANSWER QUESTIONS

[70 MARKS]

- The renal clearance of a drug is 10 mL/min. The drug has molecular weight of 350 and is 20% bound to plasma proteins. Explain in detail the renal excretion of this drug in terms of the processes its most likely to undergo. NB: Assumption - The normal GFR = 125mL/min. **[10]**
- The figure below shows the changes in plasma levels of two drugs, A and B, each given as 10 mg doses by both the oral and intravenous routes to an adult man. From the plasma concentration-time curves, describe how the drugs compare for the following properties. **[10]**



- Absorption from the gastrointestinal tract [2]
- Oral bioavailability [2]
- Distribution to tissues [2]
- Elimination half-life [2]
- Extent of accumulation with once-daily administration of each drug [2]

- A man weighing 70 kg was admitted to hospital with a serious infection and was treated with two antibacterial drugs. Gentamicin is given by intravenous administration, and cefalexin is given orally with bioavailability of 90% ($F = 0.9$).

	Gentamicin	Cefalexin
Volume of distribution (Vd) (L)	18	18
Clearance (CL) (L/hr)	5.4	18
Half-life (hr)	2-3	0.9

Gentamicin is very toxic and its therapeutic plasma concentrations **should not exceed 5 mg/L**, since higher concentrations can lead to ototoxicity and nephrotoxicity.

- A. You have calculated that you will give 900 mg of gentamicin by injection as a bolus (single) dose. Is this a safe dose? **[4]**
- B. Because of the short half-life of gentamicin, you then decide that it will be best to give him a continuous intravenous infusion to maintain a steady-state plasma concentration of 2.5 mg/L. What rate of infusion should be given? **[6]**
- C. What maximum plasma concentration would be obtained if a single oral loading dose of 500 mg cefalexin was given? **[5]**
- D. What is a loading dose and why is it often given? **[5]**
4. Explain the following pharmacological concepts: **[10]**
 - A. Potency [2]
 - B. Efficacy [2]
 - C. Affinity [2]
 - D. Dose-response relationships [2]
 - E. Drug selectivity [2]
5. Compare and contrast the following terms: **[10]**
 - A. Full agonist, inverse agonist and antagonist [5]
 - B. Active transport and facilitated diffusion of drugs [5]
6. Bethanechol is a drug used to stimulate smooth muscle motor activity of the urinary tract to prevent urine retention. It produces its effects by binding to the G_q-protein-coupled receptors. Discuss the signal transduction pathway from the binding of bethanechol to the receptors to effecting urinary smooth muscle contraction. **[10]**

END